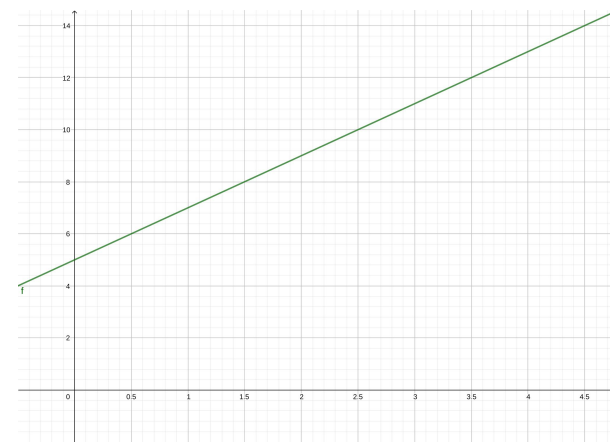


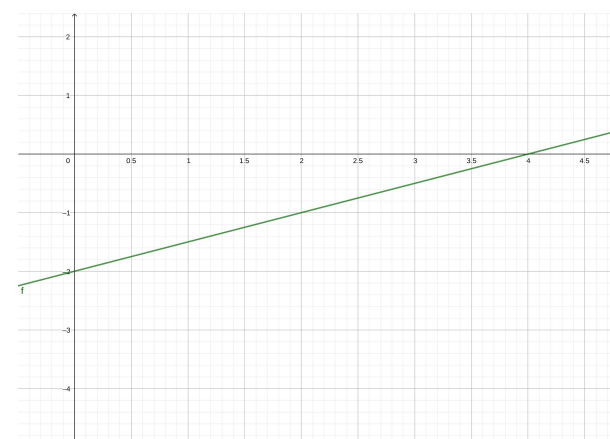
$$f(x) = 2x - 5$$

x	1	2	3	4
f(x)	8	12	16	20



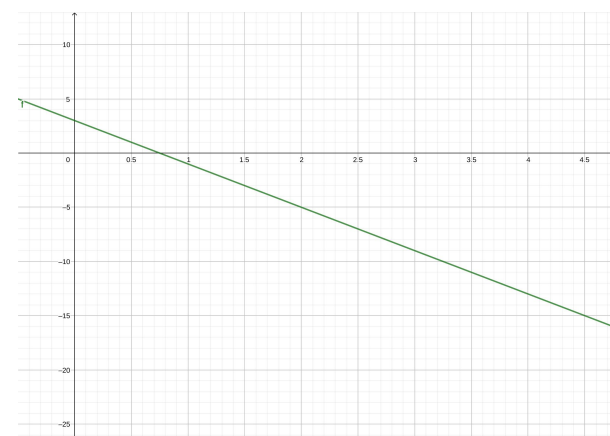
$$f(x) = 10x - 10$$

x	1	2	3	4
f(x)	0	3	6	9



$$f(x) = -3x + 8$$

x	1	2	3	4
f(x)	10,5	11	11,5	12



$$f(x) = \frac{1}{4}x + 2$$

x	1	2	3	4
f(x)	2	0	-2	-4

