
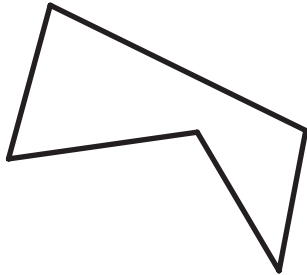
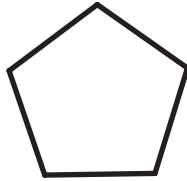
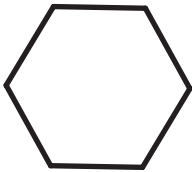




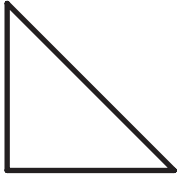
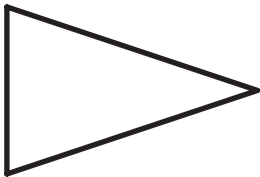
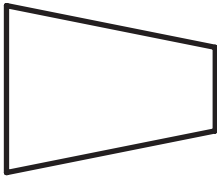
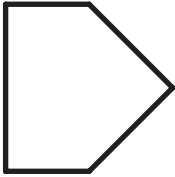

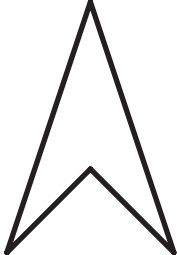
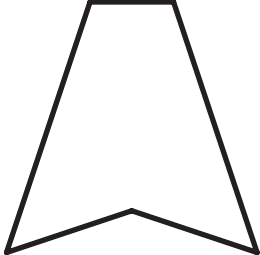


KOPIARK 10

<p>Det er en femkant</p> <p>Geometriske figurer 10 </p>	<p>Det er en polygon</p> <p>Geometriske figurer 10 </p>	<p>Alle vinkler er lige store</p> <p>Geometriske figurer 10 </p>
<p>Den er irregulær</p> <p>Geometriske figurer 10 </p>	<p>Vinkelsummen er 720</p> <p>Geometriske figurer 10 </p>	<p>Vinkelsummen er 540</p> <p>Geometriske figurer 10 </p>
<p>Det er en firkant</p> <p>Geometriske figurer 10 </p>	<p>Den er regulær</p> <p>Geometriske figurer 10 </p>	<p>Den er konveks</p> <p>Geometriske figurer 10 </p>
<p>Vinkelsummen er 180</p> <p>Geometriske figurer 10 </p>	<p>Vinkelsummen er 360</p> <p>Geometriske figurer 10 </p>	<p>Den er konkav</p> <p>Geometriske figurer 10 </p>
<p>Den har mindst to lige store vinkler</p> <p>Geometriske figurer 10 </p>	<p>Det er en sekskant</p> <p>Geometriske figurer 10 </p>	<p>Den har mindst tre lige store vinkler</p> <p>Geometriske figurer 10 </p>

KOPIARK 11

 <p>Geometriske figurer 11 TURBO</p>	 <p>Geometriske figurer 11 TURBO</p>	 <p>Geometriske figurer 11 TURBO</p>
 <p>Geometriske figurer 11 TURBO</p>	 <p>Geometriske figurer 11 TURBO</p>	 <p>Geometriske figurer 11 TURBO</p>
 <p>Geometriske figurer 11 TURBO</p>	 <p>Geometriske figurer 11 TURBO</p>	 <p>Geometriske figurer 11 TURBO</p>
 <p>Geometriske figurer 11 TURBO</p>	 <p>Geometriske figurer 11 TURBO</p>	 <p>Geometriske figurer 11 TURBO</p>
 <p>Geometriske figurer 11 TURBO</p>	 <p>Geometriske figurer 11 TURBO</p>	 <p>Geometriske figurer 11 TURBO</p>